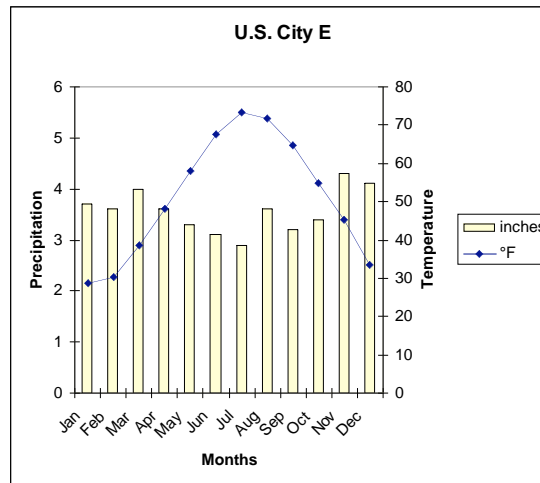
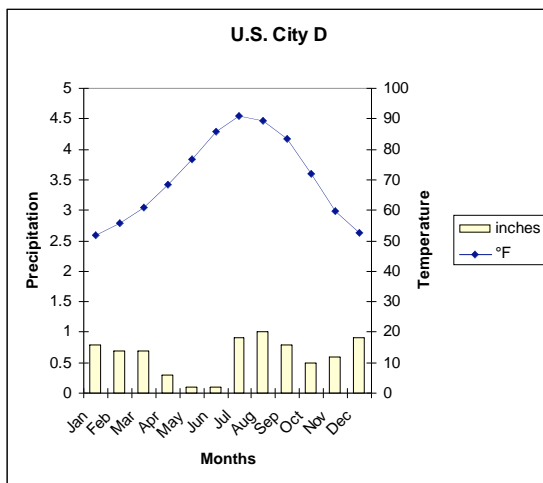
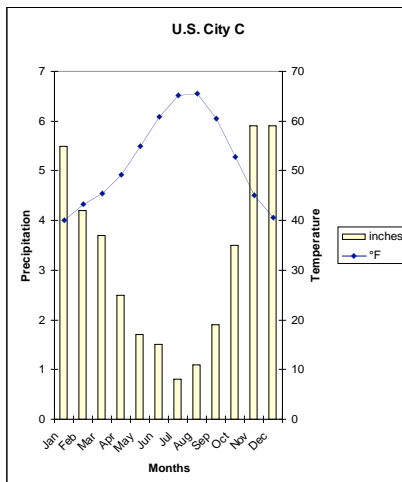
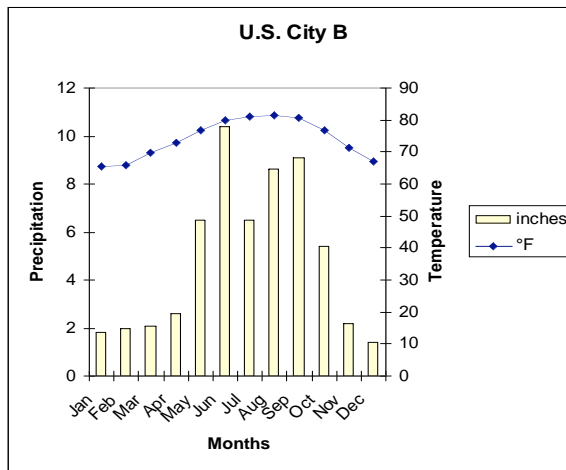
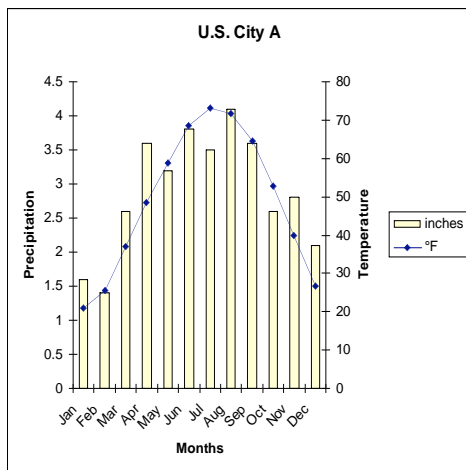


## What Can You Say About the Climate of These Cities?



## Climographs of U.S. Cities

Name(s) \_\_\_\_\_

1. What is the warmest month at your location? \_\_\_\_\_
2. What is the average temperature of the coldest month at your location?
3. Remembering that temperatures vary a great deal during the day, do you think the temperature goes below 32°F or 0°C at any time in April at your location? Why or why not?
4. What is the driest month at your location? \_\_\_\_\_
5. Is this a good place to visit for a warm-weather winter vacation? \_\_\_\_\_
6. Do they sell many snowmobiles in winter at this location? \_\_\_\_\_
7. What kind of crops could grow at this location without irrigation? Explain your choices.
8. What kind of natural vegetation would you expect to find at your location
9. Do you think flooding is a serious risk at this location? Why?
10. Based on your knowledge of the geography of the United States, where do you think this location is? Explain.
11. Could any of the following be your location? (Circle the possibilities.)

Anchorage	Atlanta	Boston
Chicago	Denver	Des Moines
Duluth	Houston	Los Angeles
Miami	New York City	Phoenix
Seattle		

## Answer Key: Identification of U.S. Cities

City A = Chicago

City B = Miami

City C = Seattle

City D = Phoenix

City E = Boston